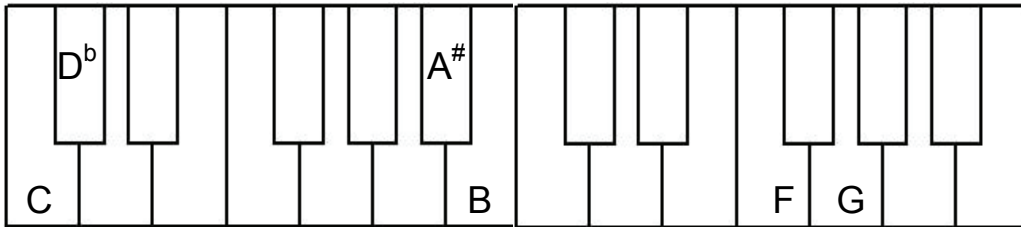
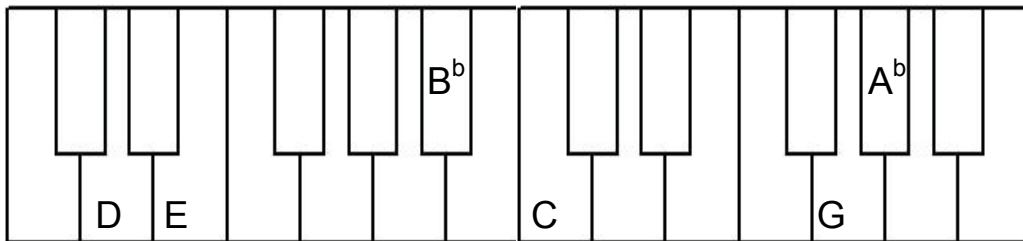


# Grade Three Worksheet 1

1. Draw a circle around the correct answer to show the distance between the two keys.





half step    whole step                  half step    whole step                  half step    whole step



half step    whole step                  half step    whole step                  half step    whole step

2. Draw a circle around the notes that should be played legato.



3. Answer the questions about the musical example below.

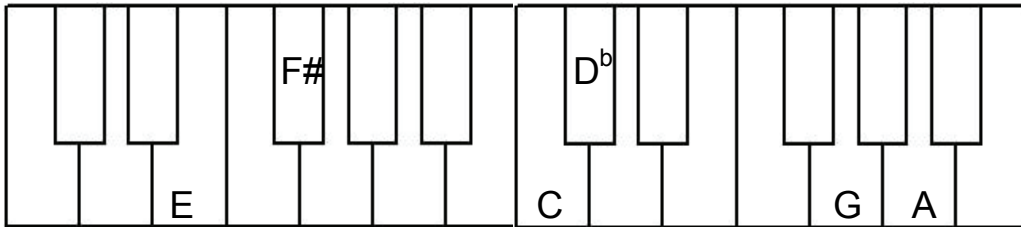
A. How many beats are in each measure? \_\_\_\_\_

B. How many measures are there? \_\_\_\_\_

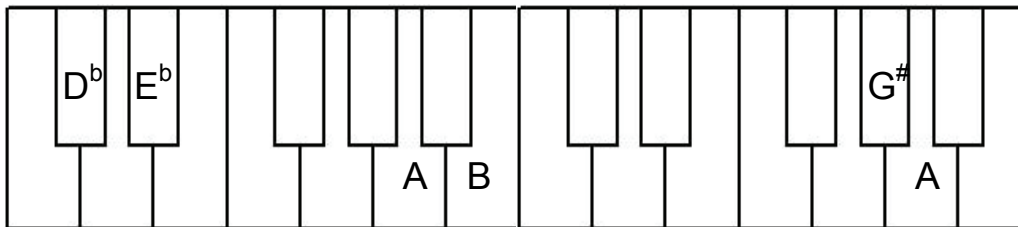
C. What is the note name of beat 1 in the 3rd measure? \_\_\_\_\_

# Grade Three Worksheet 2

1. Draw a circle around the correct answer to show the distance between the two keys.




half step   whole step                      half step   whole step                      half step   whole step




half step   whole step                      half step   whole step                      half step   whole step

2. Draw a circle around the notes that should be played staccato.



3. Answer the questions about the musical example below.



- A. How many beats are in each measure? \_\_\_\_\_
- B. How many measures are there? \_\_\_\_\_
- C. What is the name of the clef? \_\_\_\_\_